


# Մաթեմատիկական առաջադրանքներ

Նշված ուղղությամբ շարժվելով, գտիր արտահայտությունների արժեքները:



3				
+2		-1		+5


					-2

	+2		-4		+3

-1	
----	--


	-6
	+9



5				
+3		-4		+2



-1



	+3		-4		+3
--	----	--	----	--	----





-1




	+3
--	----

-2






6				
+2		-4		+3



-1




	+3		-5		+2
--	----	--	----	--	----




-1



	+2
--	----





-1







↓

4				
+2		-1		+5



				
	+3		-4	+2



-1	
	+2




	-3






4
+1



		-2		+5
--	--	----	--	----




-3



	+3		-4		+2
--	----	--	----	--	----



-1
----



	+2
--	----



-3






A math maze with the following grid structure and content:

	7				
	+3		-4		+2
					-1
		+2		-6	+2
	-1				
		+2			
		-1			


The maze starts at the square containing the number 7, indicated by a downward arrow. The path leads through the squares containing +3, -4, +2, -1, +2, -1, and finally to Minnie Mouse.



4				
+3		-1		+4



-2



	+3		-4		+1
--	----	--	----	--	----



-2

	+3
--	----

--

-2
----

--

